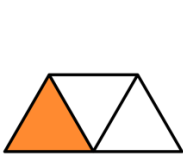


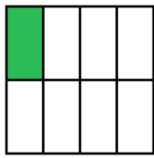
NAAM: .....

# STAMBREUKEN

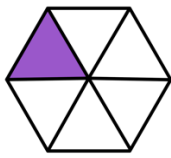
VERBIND DE BREUK MET DE JUISTE TEKENING.



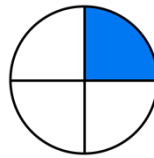
•



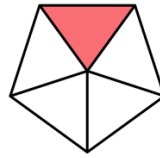
•



•



•



•



•

•

$\frac{1}{2}$

•

$\frac{1}{5}$

•

$\frac{1}{8}$

•

$\frac{1}{4}$


•

$\frac{1}{3}$

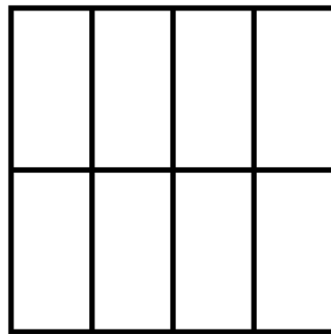
•

$\frac{1}{6}$

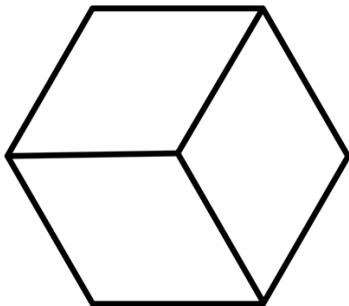
KLEUR HET GEVRAAGDE DEEL.



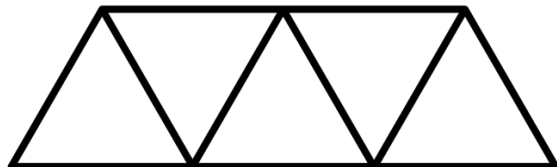
$\frac{1}{2}$



$\frac{1}{8}$



$\frac{1}{3}$



$\frac{1}{5}$

NAAM: .....

WELKE BREUK HOORT ERBIJ?

